



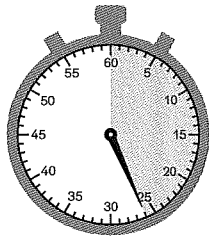





KV 95: Stoppuhren ablesen und Zeiger einzeichnen

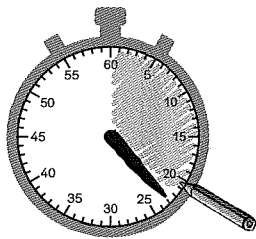
1 Lies ab, wie viele Sekunden (s) seit dem Start der Stoppuhr vergangen sind.



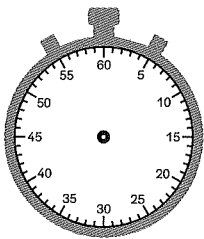
20 s



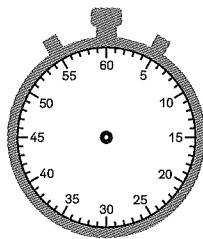
2 Zeichne jeweils die Zeiger ein und male den Teil auf dem Zifferblatt der Uhr aus, über den sich der Zeiger bewegt hat.



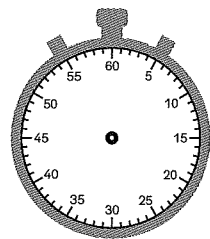
23 s



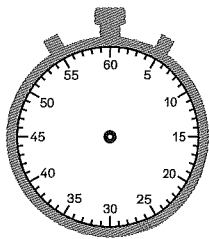
58 s



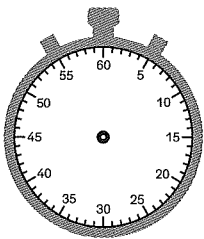
9 s



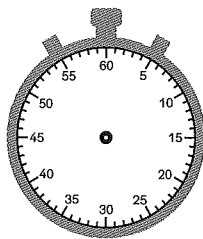
47 s



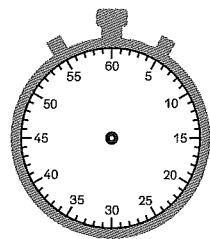
34 s



41 s




13 s



29 s

3 Die Stoppuhren haben einen zweiten kleinen Zeiger. Dieser zählt die Minuten. Lies die Zeiten in Minuten (min) und Sekunden (s) ab.



2 min 23 s

